



Antwoorden



Rekenen Getallen niveau C

	
4	3

4 = 40
3

T	E
7	1



7 = 70
1 = 1

	
2	6

2 = 20
6

T	E
9	3



9 = 90
3 = 3

	
2	0

2 = 20

T	E
5	8

5 = 50
8 = 8

	
	9

9

T	E
3	5

3 = 30
5 = 5

H	T	E
4	0	3

4 = 400

0 = 0

3 = 3

403

honderdtallen	tientallen	eenheden
		
9	1	1

9 = 900

1 = 10

1 = 1

911




H	T	E
3	2	0

3 = 300

2 = 20

0 = 0

320

honderdtallen	tientallen	eenheden
		
5	1	9

5 = 500

1 = 10

9 = 9

519

H	T	E
1	9	3

1 = 100

9 = 90

3 = 3

193

426

H	T	E
4	2	6

220

H	T	E
2	2	0

148

H	T	E
1	4	8

101

H	T	E
1	0	1

573

H	T	E
5	7	3

95

H	T	E
	9	5

952

H	T	E
9	5	2

604

H	T	E
6	0	4

314

H	T	E
3	1	4

150

H	T	E
1	5	0

420

H	T	E
4	2	0

11

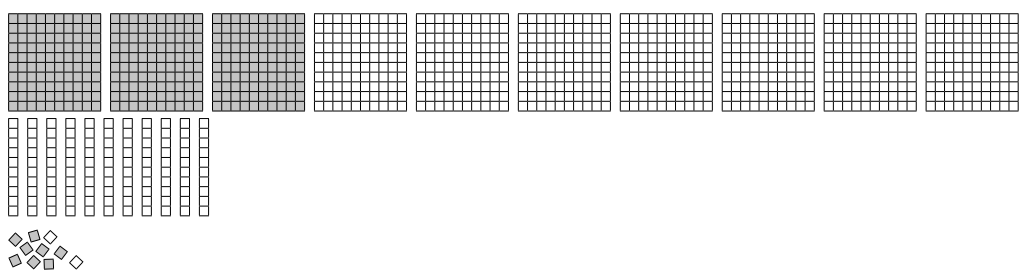

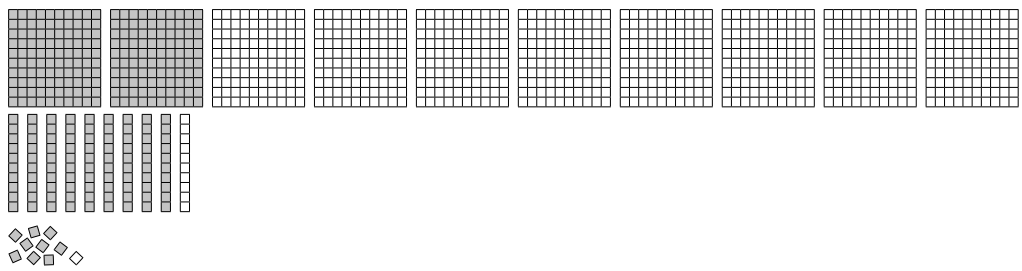

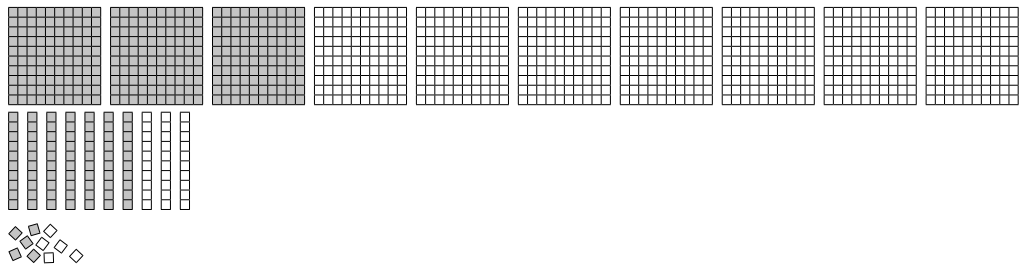
H	T	E
	1	1

805

H	T	E
8	0	5

101

H	T	E
1	0	1



5 tientallen = 50

D	H	T	E
4	2	5	0

1 tiental = 10

D	H	T	E
3	0	1	0

2 duizendtallen = 2.000

D	H	T	E
2	1	4	9

2 duizendtallen = 2.000

D	H	T	E
2	0	7	1

3 honderdtallen = 300

D	H	T	E
1	3	1	5

7 tientallen = 70

D	H	T	E
2	4	7	5

6 eenheden = 6

D	H	T	E
1	2	9	6

1 duizendtal = 1.000

D	H	T	E
1	0	9	9

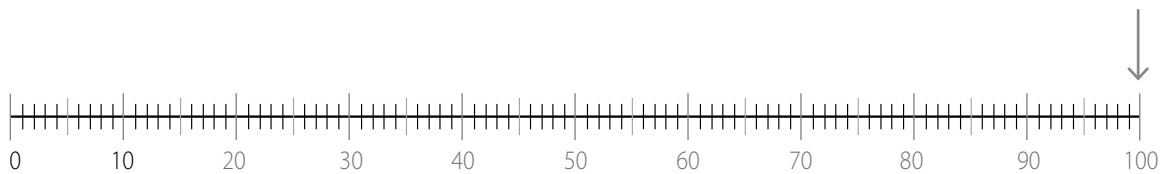
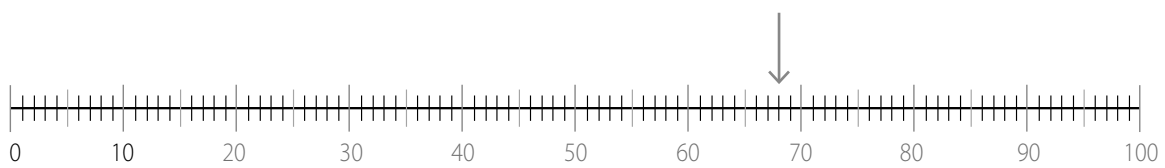
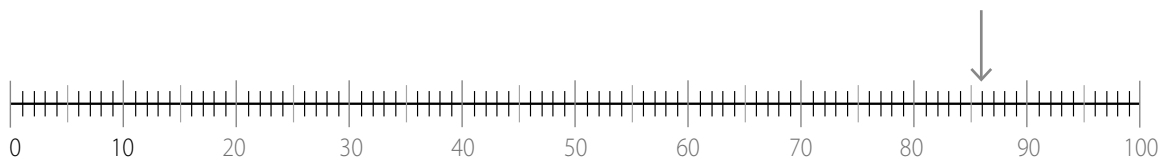
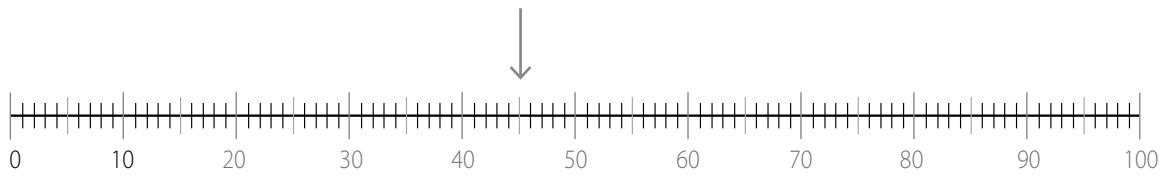
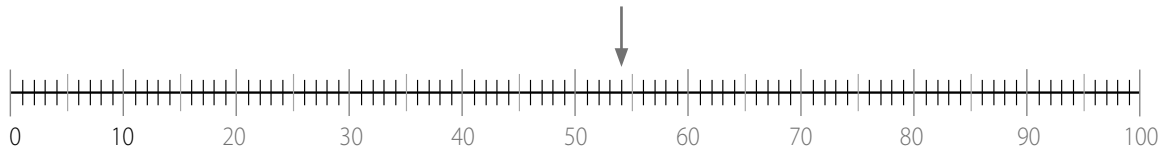
2 honderdtallen = 200

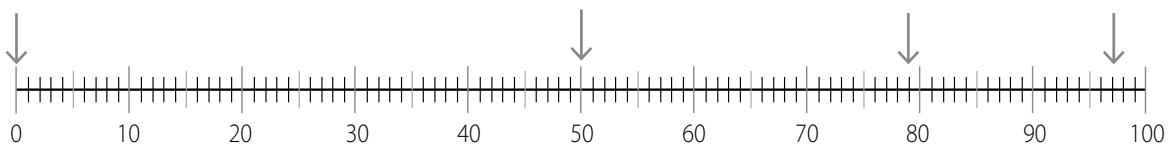
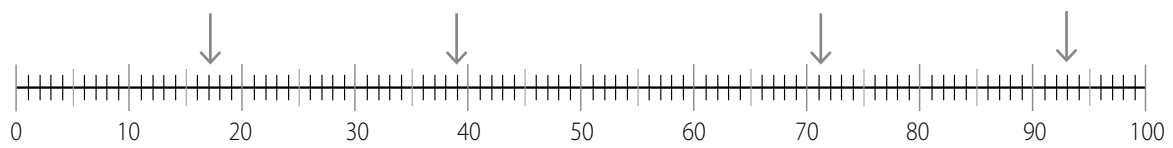
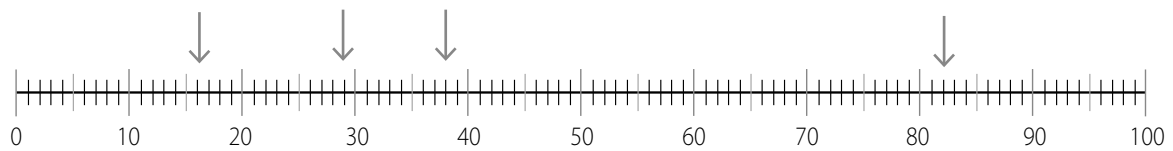
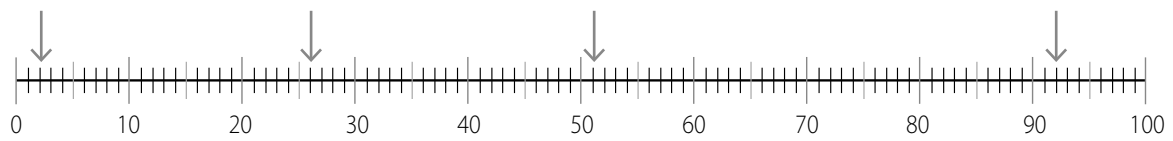
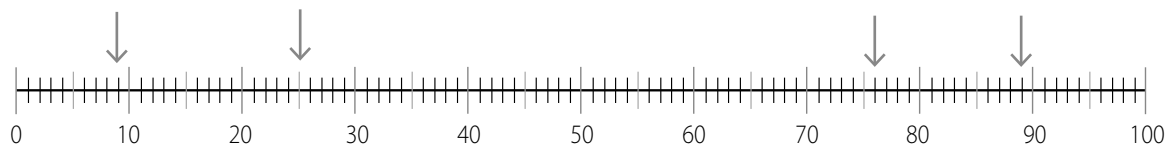
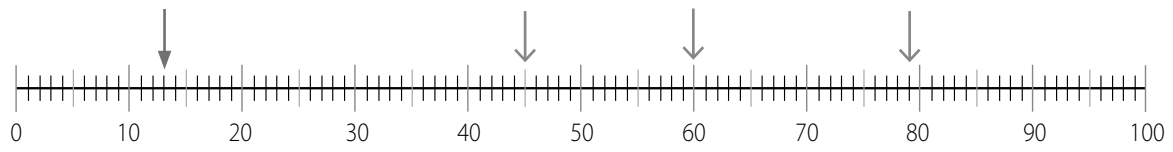
D	H	T	E
3	2	4	5

1 tiental = 10

D	H	T	E
2	0	1	2

23	zestien
28	eenenzestig
61	vijftien
40	vijftig
75	eenenvijftig
22	tachtig
90	honderdtachtig
13	zesentachtig
36	honderdzesentachtig
19	zeshonderdzesentachtig
126	honderdelf
836	tweehonderdzeven
396	zevenhonderdtwee
101	tweeënzeventig
150	honderdzevenentwintig
12	vierhonderd
112	honderd
612	honderdeen
620	honderdtien
622	vierhonderdtien
909	vijfhonderdtwee
919	vijfhonderdtwintig
990	vijfhonderdnegentien
991	vijfhonderdeenennegentig
999	negenhonderdvijftien





Welk getal wijst de pijl aan?

C 23

Welk getal wijst de pijl aan?

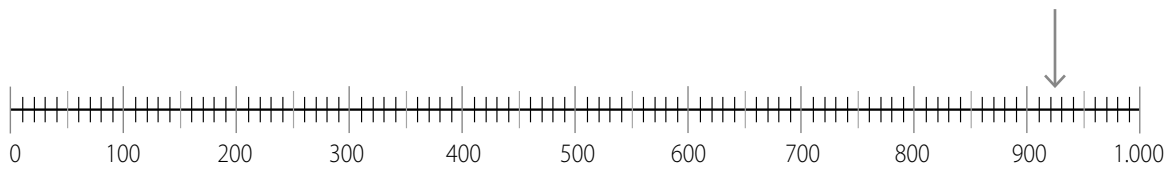
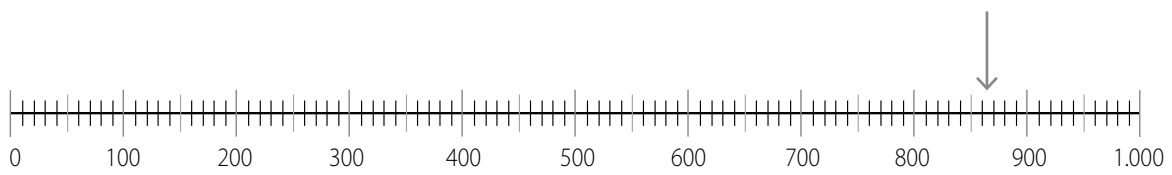
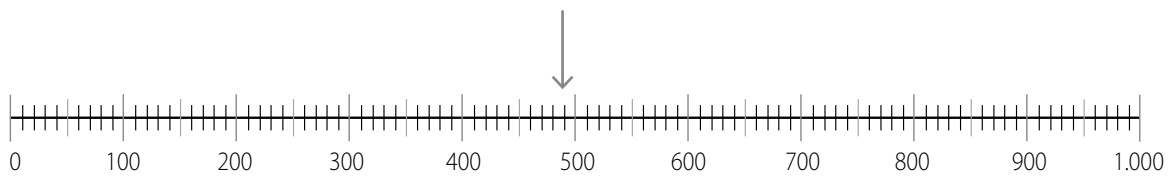
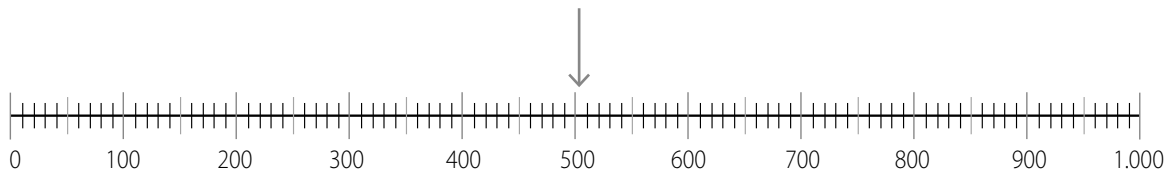
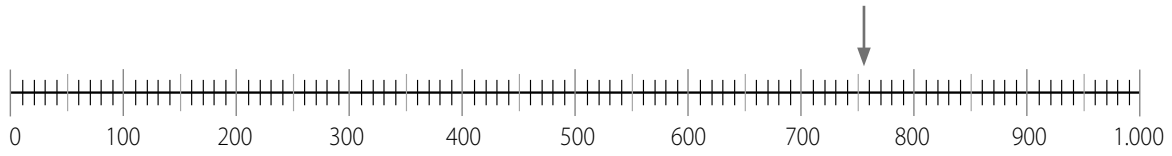
C 51

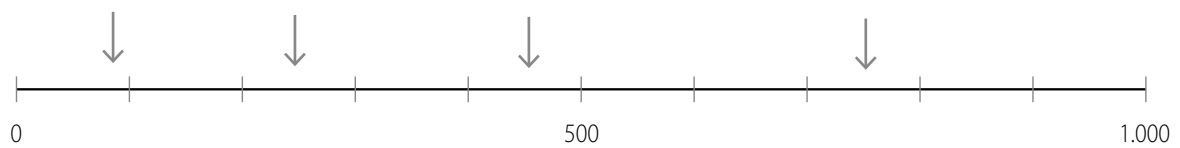
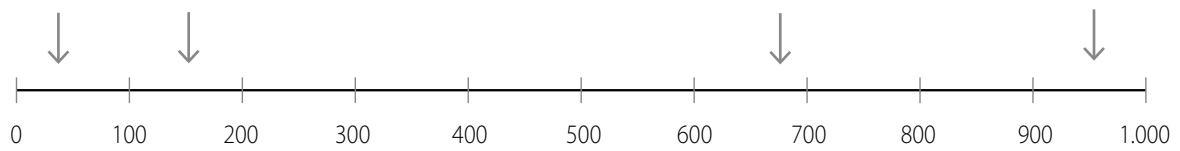
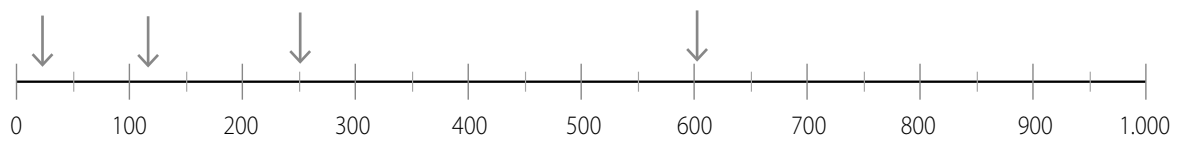
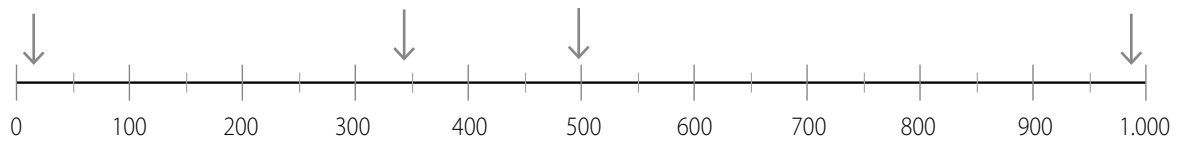
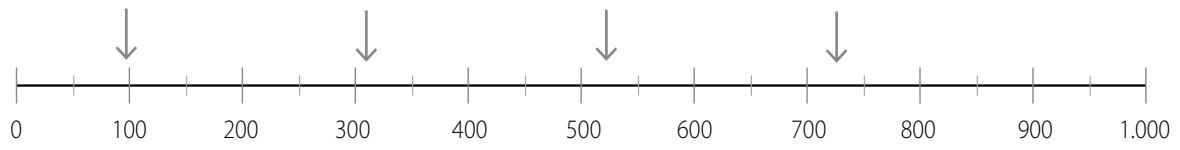
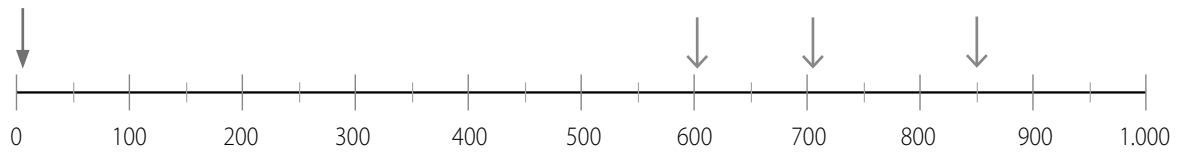
Welk getal wijst de pijl aan?

B 75

Welk getal wijst de pijl aan?

D 53





Welk getal wijst de pijl aan?

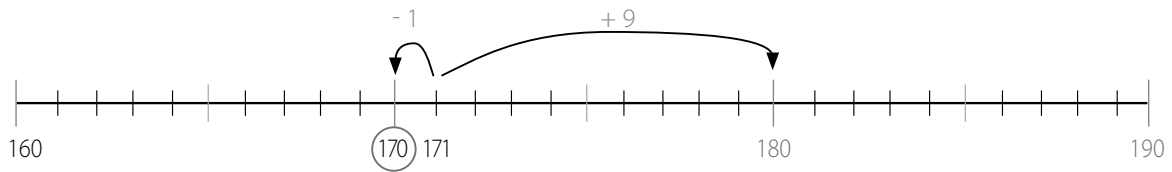
A 550

B 320

D 625

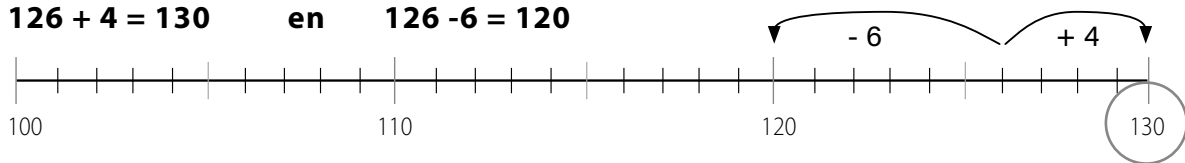
A 551

B 875

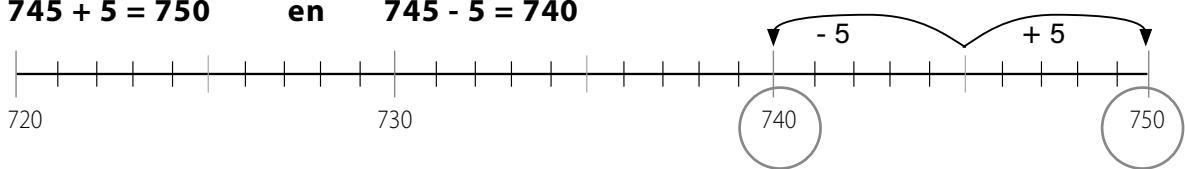


$171 + 9 = 180$ en $171 - 1 = 170$

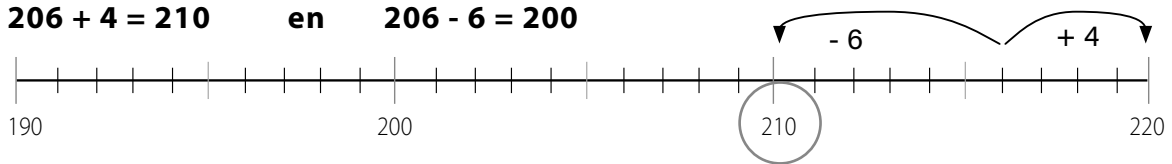
$126 + 4 = 130$ en $126 - 6 = 120$



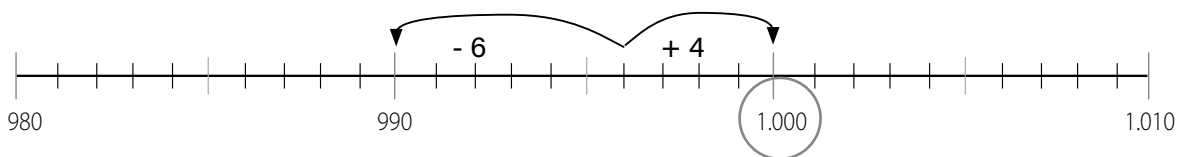
$745 + 5 = 750$ en $745 - 5 = 740$



$206 + 4 = 210$ en $206 - 6 = 200$



$996 + 4 = 1.000$ en $996 - 6 = 990$



126

$$126 + 74 = 200 \text{ en } 126 - 26 = \mathbf{100}$$

745

$$745 + 55 = 800 \text{ en } 745 - 45 = \mathbf{700}$$

206

$$206 + 94 = 300 \text{ en } 206 - 6 = \mathbf{200}$$

996

$$996 + 4 = \mathbf{1.000} \text{ en } 996 - 96 = 900$$

51

$$51 + 49 = \mathbf{100} \text{ en } 51 - 51 = 0$$

860

$$860 + 40 = \mathbf{900} \text{ en } 860 - 60 = 800$$

500

250 + **750**

400 + **600**

700 + **300**

350 + **650**

250 + 200 + 200 + **350**

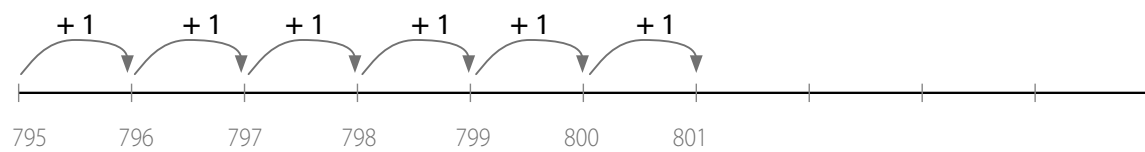
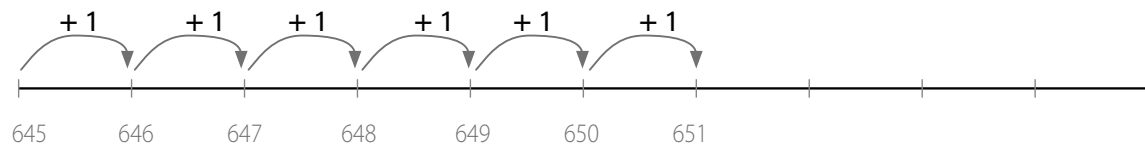
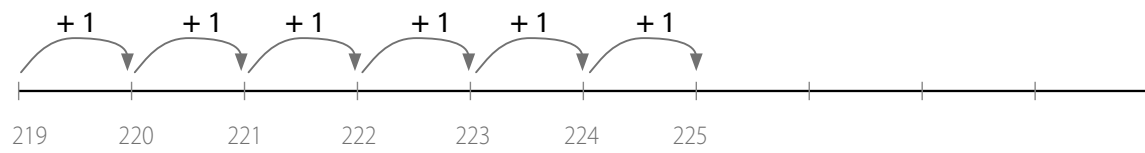
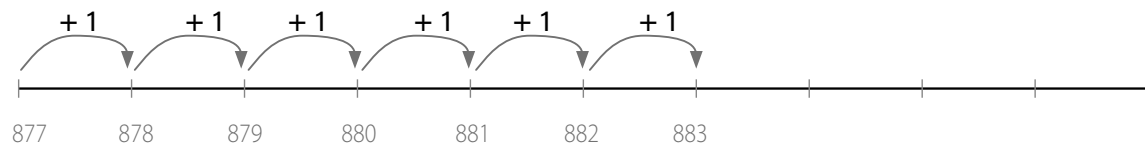
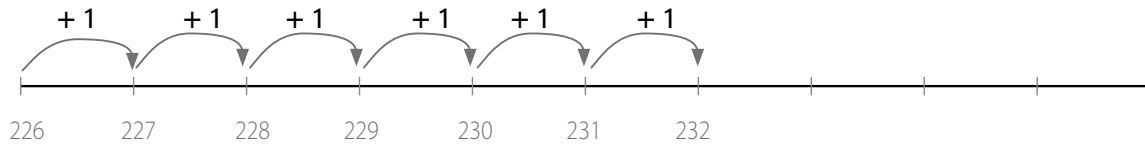
150 + 50 + 300 + **500**

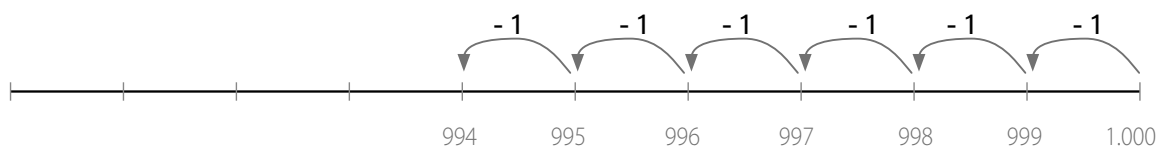
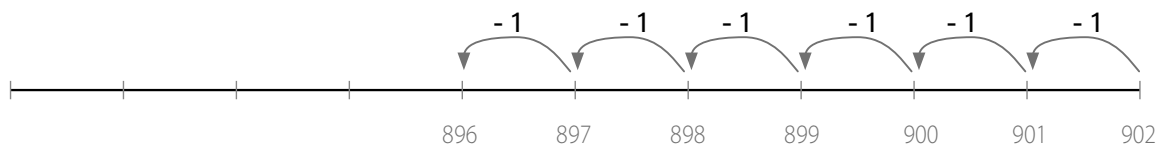
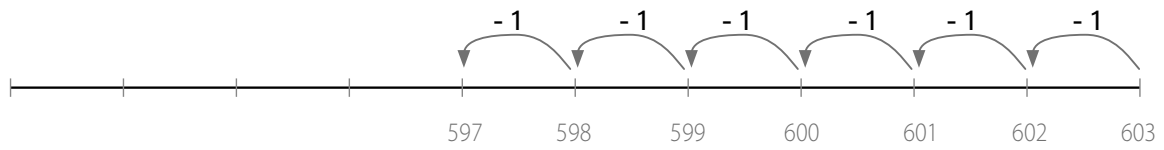
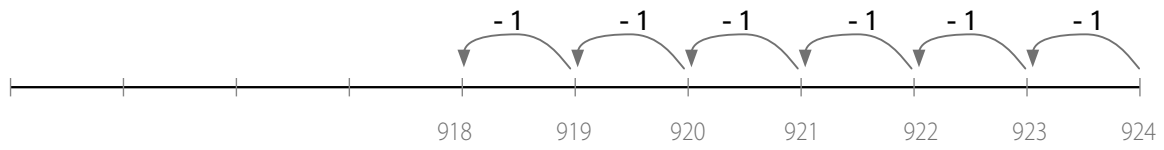
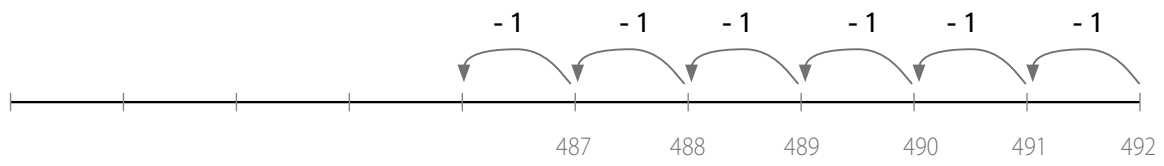
400 + 20 + 80 + **500**

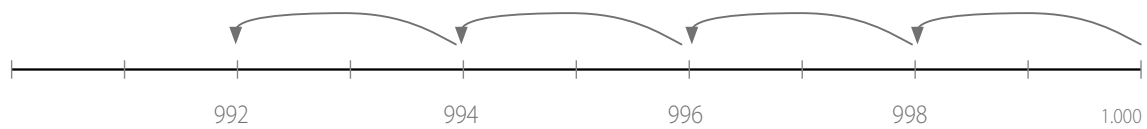
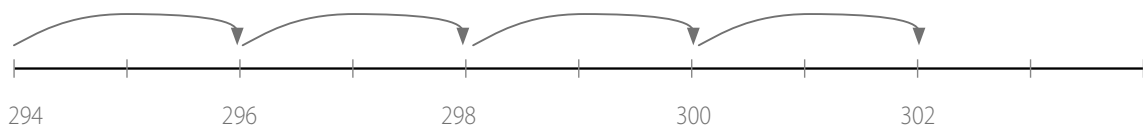
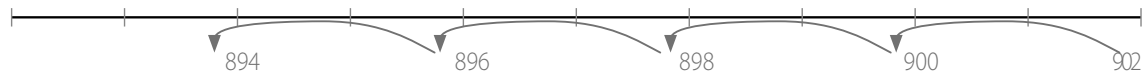
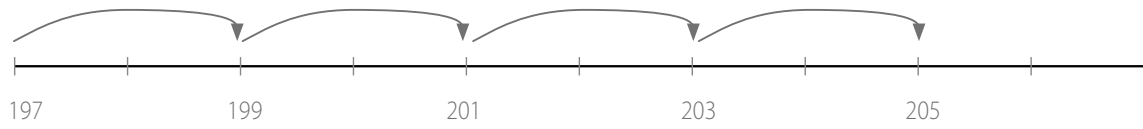
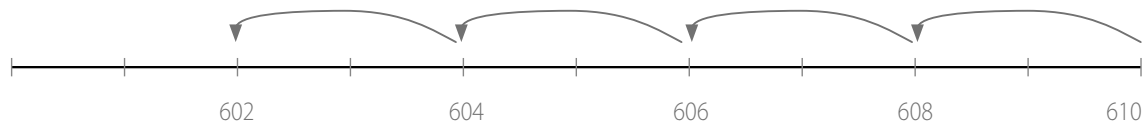
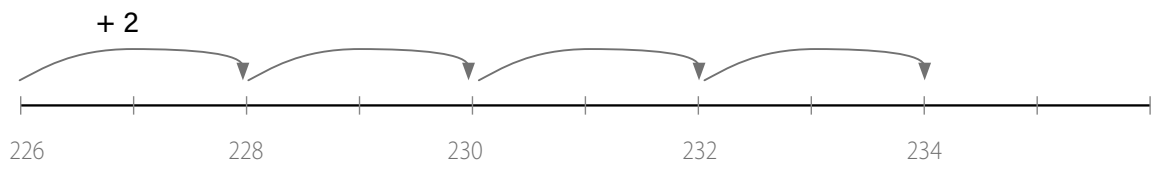
100 + 200 + 50 + **650**

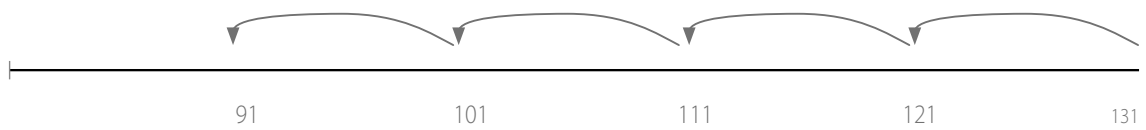
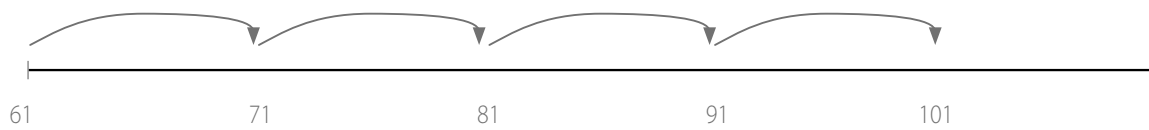
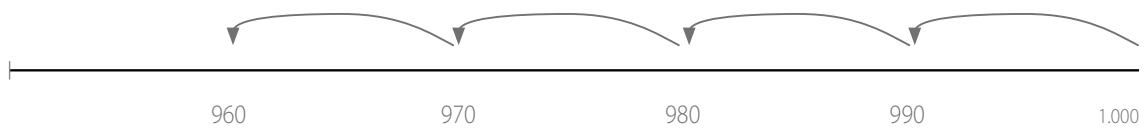
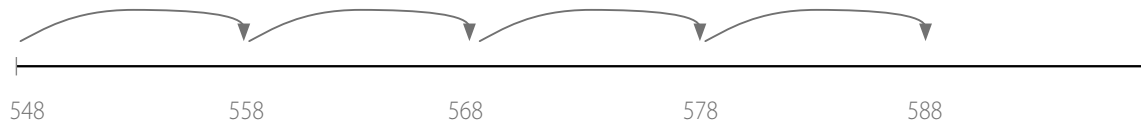
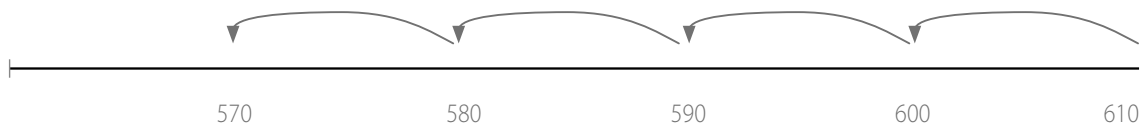
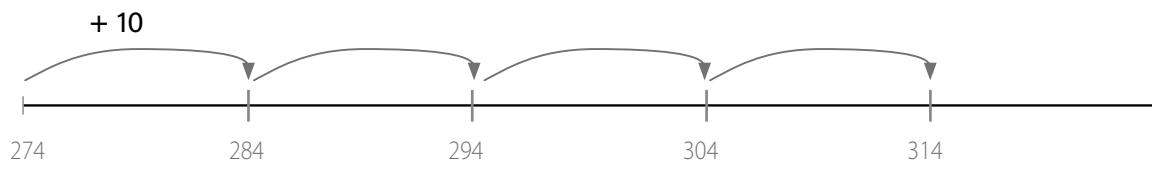
450 + 50 + 100 + **400**

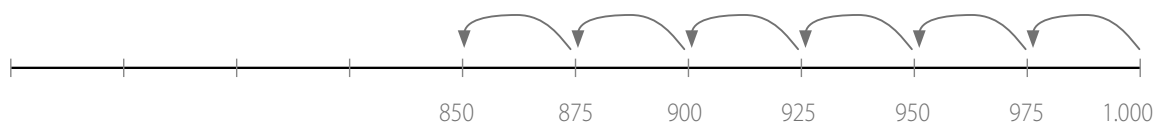
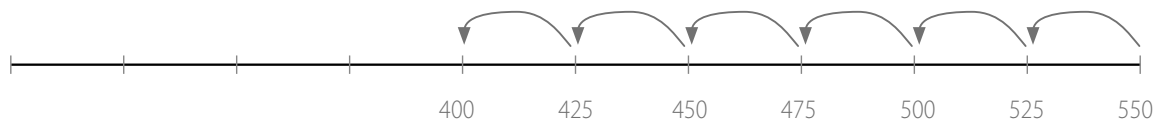
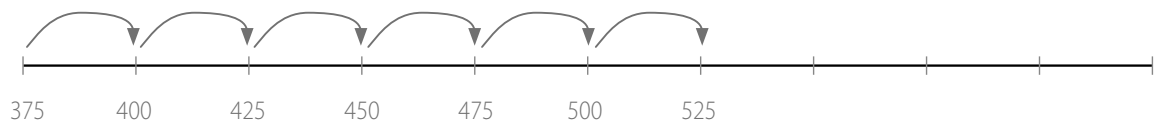
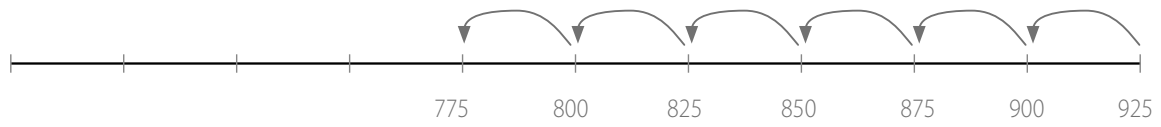
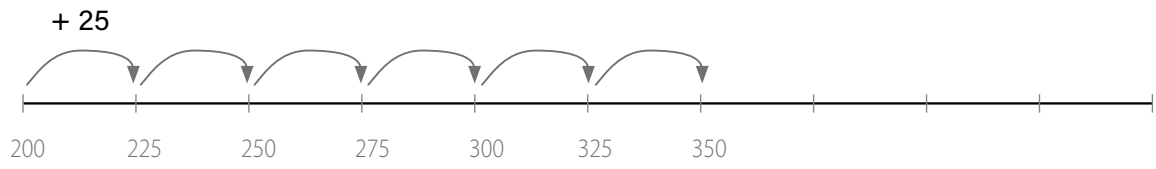
250 + 200 + 100 + **450**



































2 4 3 1

H	T	E	H	T	E	H	T	E	H	T	E
											
4	0	1	6	7	7	6	4	1	1	0	4

2 1 4 3

H	T	E	H	T	E	H	T	E	H	T	E
											
	4	1		1	4	4	1	1	1	4	1

4 2 1 3

H	T	E	H	T	E	H	T	E	H	T	E
9	1	8	8	9	1		8	9	8	2	9

4 3 2 1

H	T	E	H	T	E	H	T	E	H	T	E
2	4	5	2	4	2	2	0	3	2	0	2

3 2 1 4

H	T	E	H	T	E	H	T	E	H	T	E
9	0	2	8	9	9	7	5	9	9	7	5