




Antwoorden

Rekenen Getallen niveau E

- eenheden
- tientallen
- honderdtallen

H	T	E
7	1	2


$$700 + 10 + 2 =$$

- 
- 
- 

H	T	E
6	3	1

$$600 + 30 + 1 = 631$$

- = 
- = 

- = 
- = 

H	T	E
9	9	6

$$900 + 90 + 6 = 996$$

H	T	E
2	5	2

200

50

2

- 63
- 220
- 102
- 501
- 205
- 91

H	T	E
1	2	4

100

20

4

- 723
- 378
- 424
- 507
- 980
- 211

M	HD	TD	D	H	T	E
2	0	5	1	4	6	5

2.051.465

M	HD	TD	D	H	T	E
9	0	3	0	0	1	1

9.030.011

M	HD	TD	D	H	T	E
1	1	4	6	2	3	1

1.146.231

M	HD	TD	D	H	T	E
2	1	8	5	7	9	4

2.185.794

M	HD	TD	D	H	T	E
3	2	5	0	3	6	5

3.250.365

M	HD	TD	D	H	T	E
5	3	0	0	0	2	6

5.300.026

M	HD	TD	D	H	T	E
	6	2	9	3	8	7

629.387

M	HD	TD	D	H	T	E
2	0	2	2	1	0	0

2.022.100

M	HD	TD	D	H	T	E
6	5	6	1	0	3	8

6.561.038

M	HD	TD	D	H	T	E
8	1	1	3	6	0	2

8.113.602

6 tienduizendtallen = 60.000

M	HD	TD	D	H	T	E	t	h	d
		6	3	2	5	8	5	5	

9 duizendsten = 0,009

M	HD	TD	D	H	T	E	t	h	d
		2	8	6	4	4	5	5	9

2 honderdduizendtallen = 200.000

M	HD	TD	D	H	T	E	t	h	d
	2	4	8	1	0	5	0	0	1

8 tienden = 0,8

M	HD	TD	D	H	T	E	t	h	d
		2	4	5	5	5	8	0	

3 tienden = 0,3

M	HD	TD	D	H	T	E	t	h	d
		1	8	4	2	4	3	9	

5 eenheden = 5

M	HD	TD	D	H	T	E	t	h	d
	2	4	8	8	9	5	1	1	

2 miljoenen of miljoentallen = 2.000.000

M	HD	TD	D	H	T	E	t	h	d
2	8	4	8	5	8	5	5		

2 honderdduizendtallen = 200.000

M	HD	TD	D	H	T	E	t	h	d
	2	4	8	2	6	3	9	0	9

6 duizendsten = 0,006

M	HD	TD	D	H	T	E	t	h	d
	2	5	0	5	9	9	0	5	6

9 tienden = 0,9

M	HD	TD	D	H	T	E	t	h	d
5	2	4	8	1	0	5	9	1	0

M	HD	TD	D	H	T	E
0	2	0	0	0	0	0

200.000

M	HD	TD	D	H	T	E
3	9	0	0	0	0	0

3.900.000

M	HD	TD	D	H	T	E
0	5	0	0	0	0	0

500.000

M	HD	TD	D	H	T	E
1	7	5	0	0	0	0

1.750.000

M	HD	TD	D	H	T	E
			2	5	0	0

M	HD	TD	D	H	T	E
			0	5	0	0

Md	HM	TM	M	HD	TD	D	H	T	E
0	6	0	0	0	0	0	0	0	0

Md	HM	TM	M	HD	TD	D	H	T	E
1	5	0	0	0	0	0	0	0	0

Md	HM	TM	M	HD	TD	D	H	T	E
0	5	0	0	0	0	0	0	0	0

miljoen

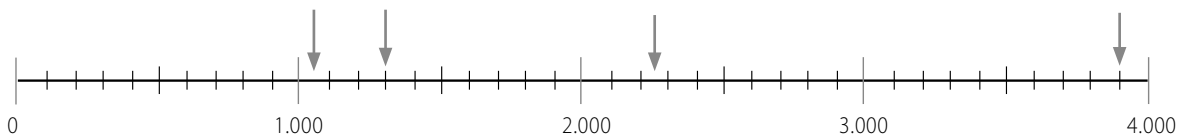
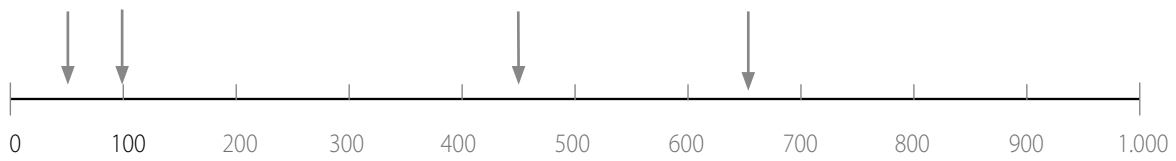
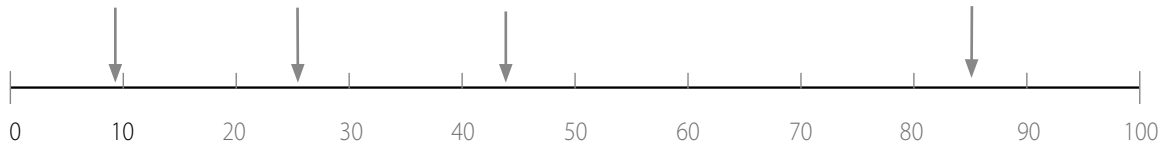
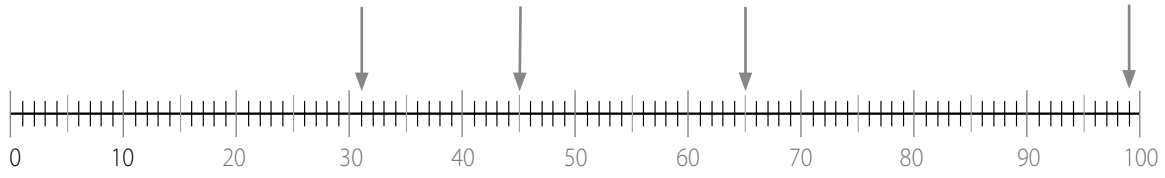
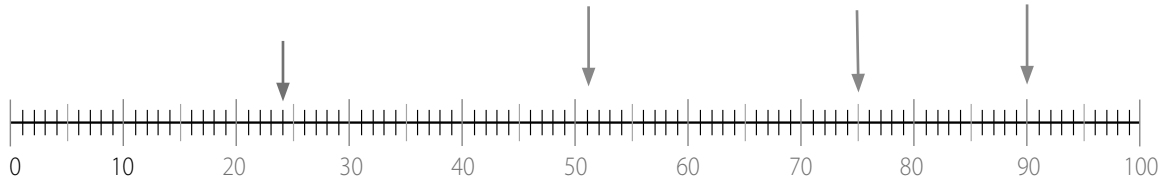
Md	HM	TM	M	HD	TD	D	H	T	E
		2	0	8	0	0	0	0	0

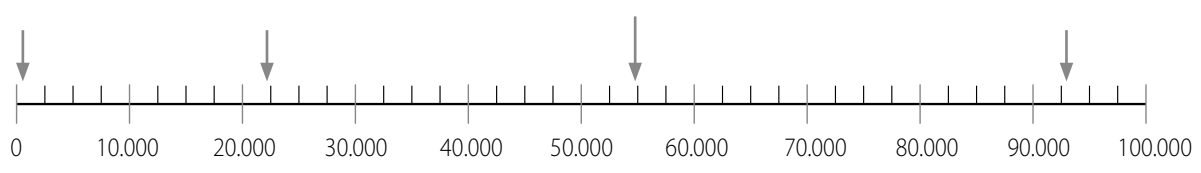
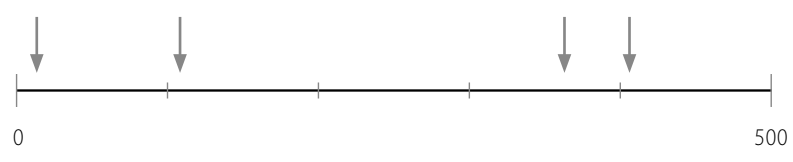
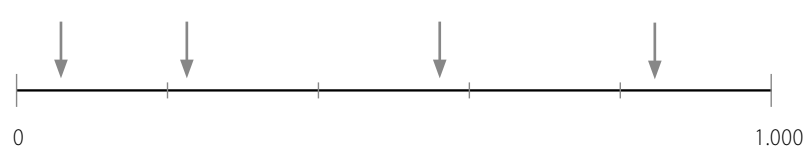
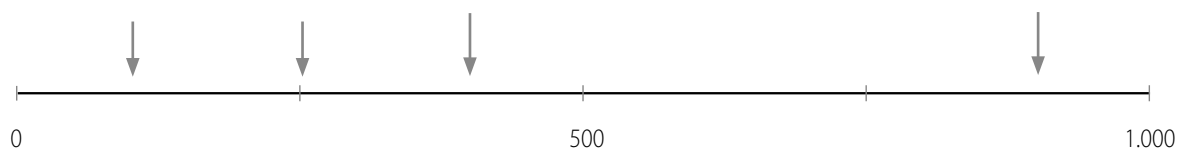
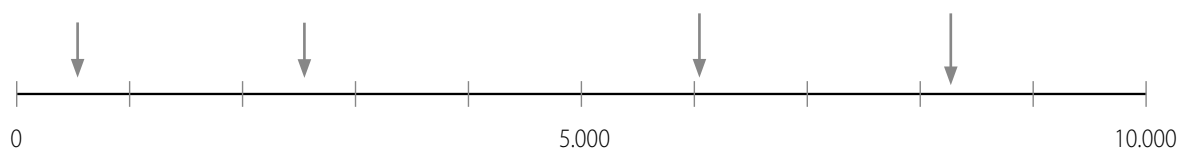
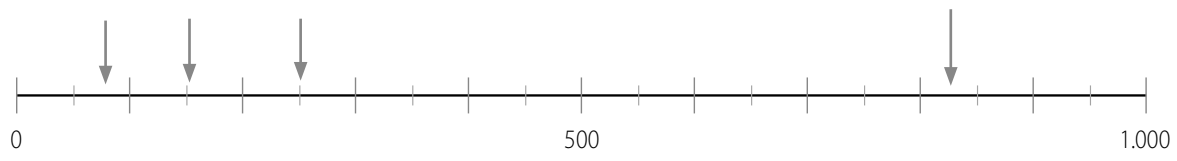
Md	HM	TM	M	HD	TD	D	H	T	E
		2	5	2	0	0	0	0	0

Md	HM	TM	M	HD	TD	D	H	T	E
0	2	5	0	0	0	0	0	0	0

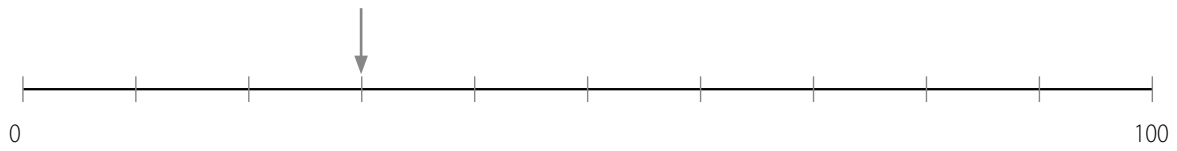
Md	HM	TM	M	HD	TD	D	H	T	E
		9	9	9	9	0	0	0	0

Md	HM	TM	M	HD	TD	D	H	T	E
0	7	5	0	0	0	0	0	0	0





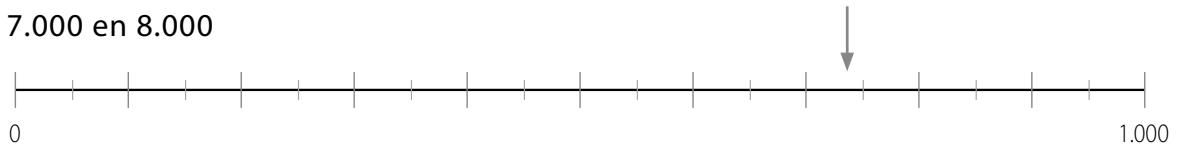
30 en 40



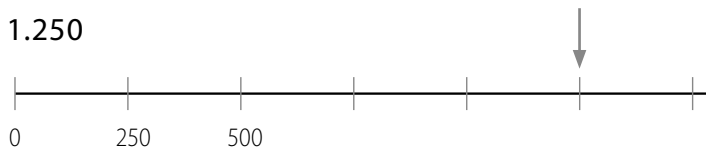
500 en 600



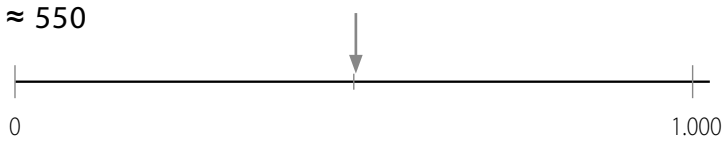
7.000 en 8.000



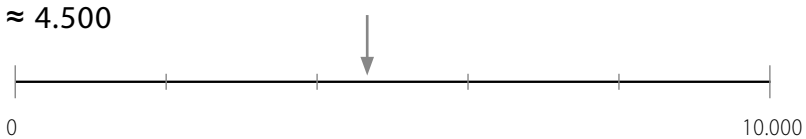
1.250

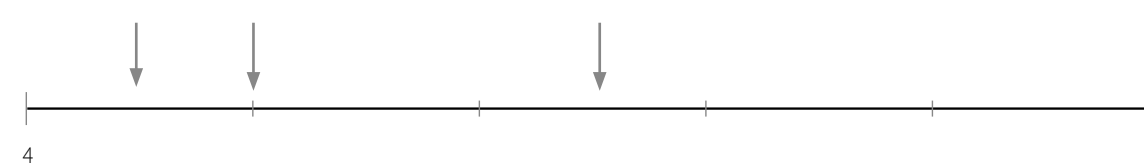
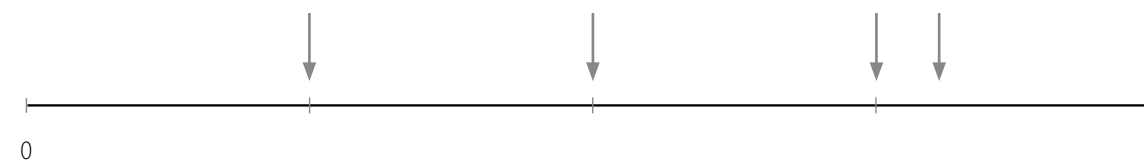
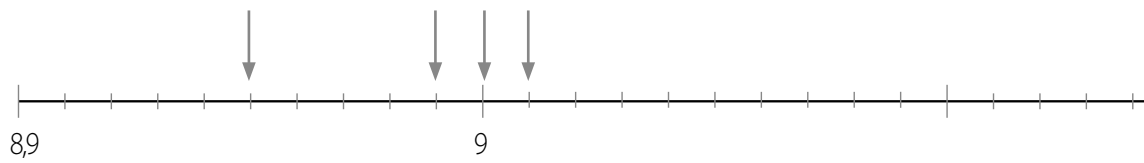
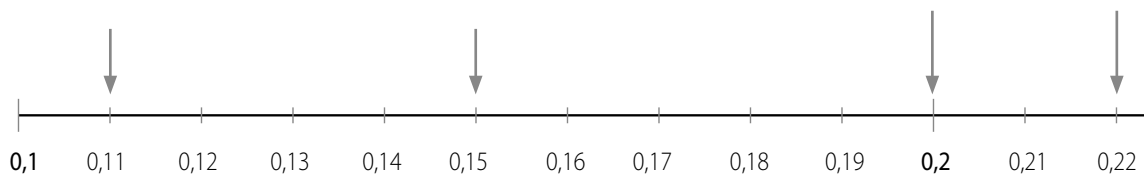
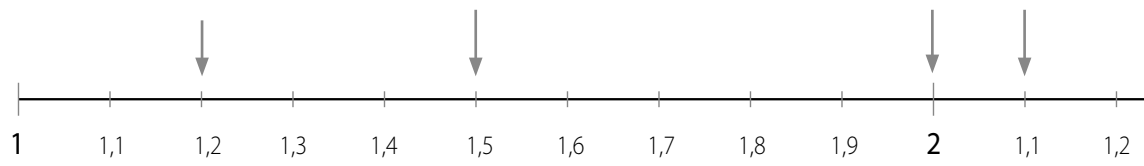
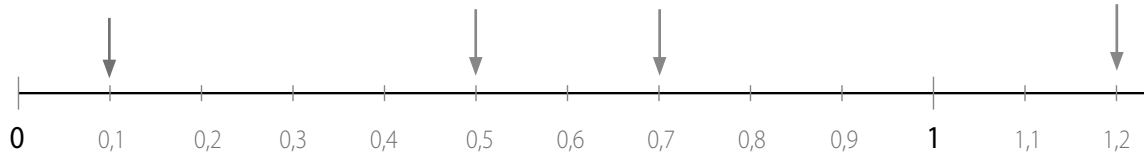


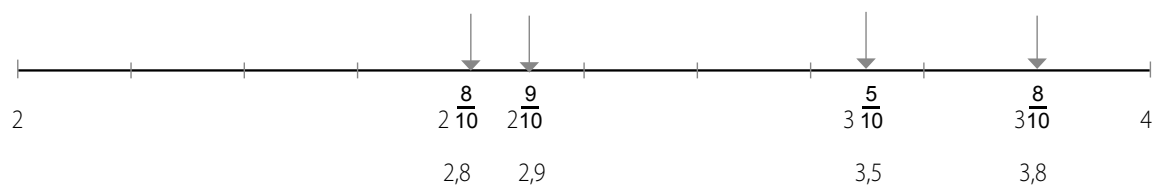
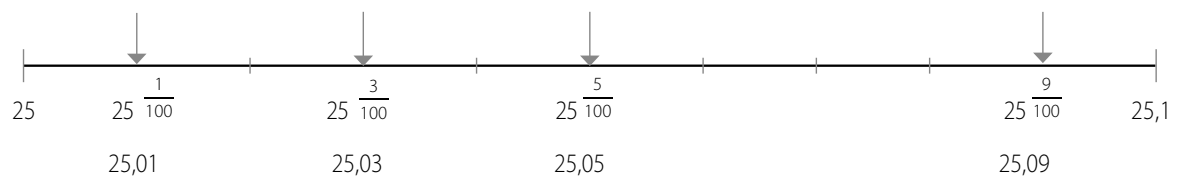
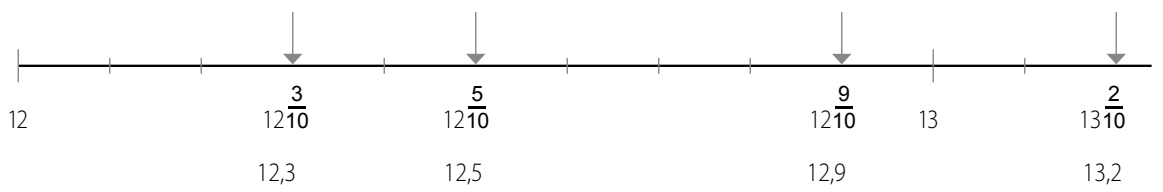
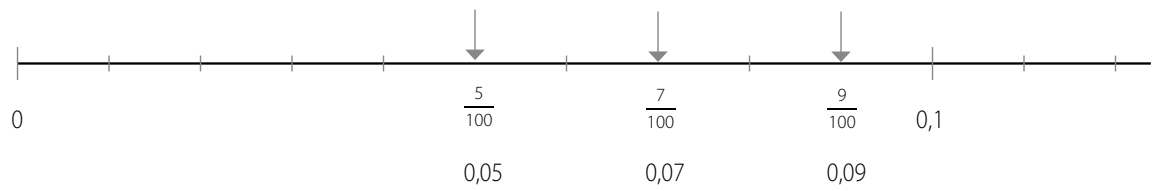
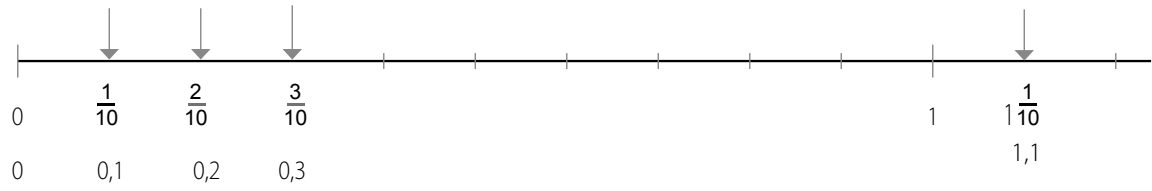
≈ 550

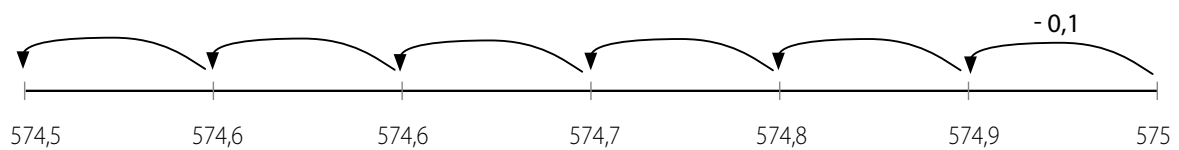

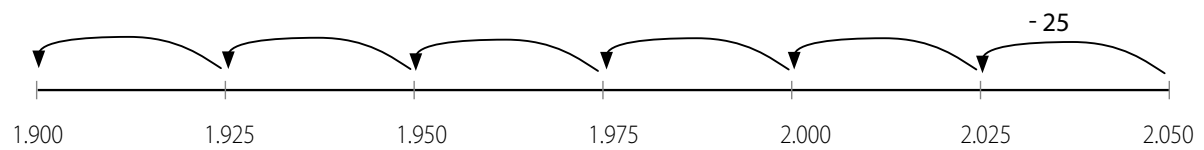
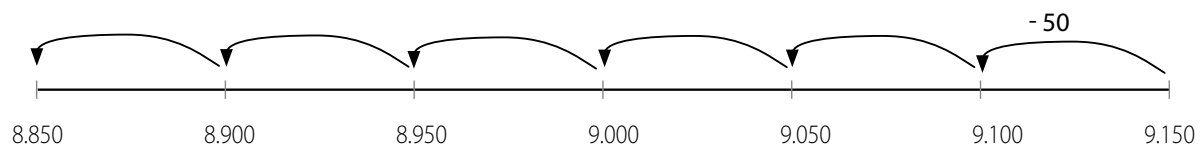
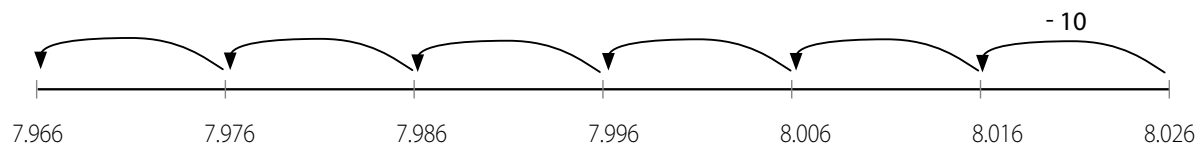
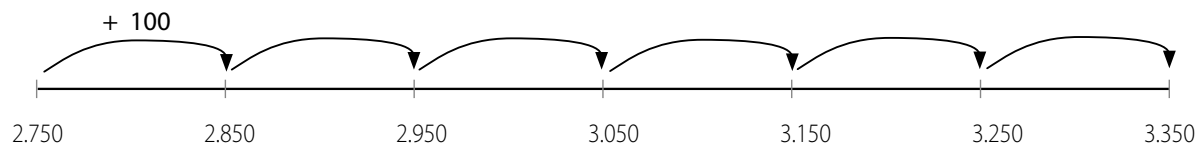
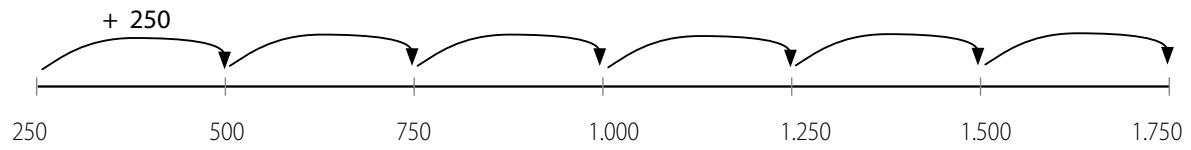
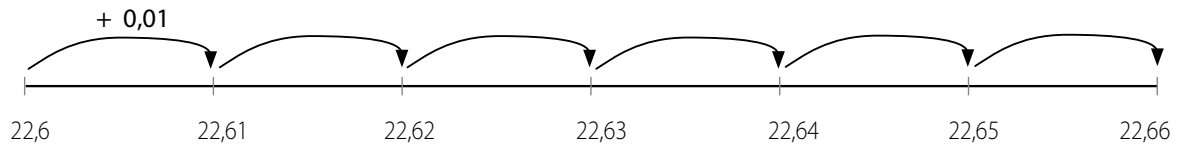
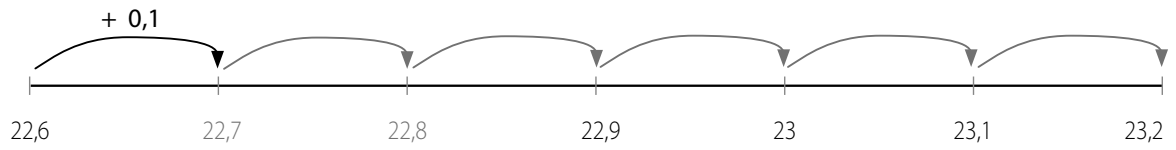


≈ 4.500









D	H	T	E
7	0	3	0

TD	D	H	T	E
2	2	8	9	0

D	H	T	E
1	9	0	0

TD	D	H	T	E
4	5	0	0	0

D	H	T	E
1	3	4	0

TD	D	H	T	E
	6	0	0	0

D	H	T	E
3	0	0	0

TD	D	H	T	E
1	1	1	1	0

D	H	T	E
2	0	0	0

TD	D	H	T	E
2	0	0	0	0

D	H	T	E
2	0	0	0

TD	D	H	T	E
2	0	0	0	0

TD	D	H	T	E	t	h	d
	7	0	1	5	0	1	

TD	D	H	T	E	t	h	d
	9	0	9	9	6		

TD	D	H	T	E	t	h	d
1	0	8	4	5	2	6	0

TD	D	H	T	E	t	h	d
				5	7		

TD	D	H	T	E	t	h	d
2	5	0	0	1	5	6	

TD	D	H	T	E	t	h	d
8	9	8	9	6	0		

TD	D	H	T	E	t	h	d
			8	5	0	3	

TD	D	H	T	E	t	h	d
			2	0	0		

TD	D	H	T	E	t	h	d
5	5	0	0	5	6	0	

TD	D	H	T	E	t	h	d
				1	0		

1	2	3	4			
D	H	T	E	t	h	d
			4	0	1	
			4	1	4	
		4	0	1	4	1
4	0	0	1	1		

2	3	1						
HD	TD	D	H	T	E	t	h	d
	4	0	1	0	3	9	5	
4	0	0	3	9	6			
		4	9	6	8	0	7	5

1	2	3	4			
D	H	T	E	t	h	d
			0	9	1	
			1	1	9	
	1	0	9	9		
	1	0	9	1	9	

1	3	2						
	M	HD	TD	D	H	T	E	t
	1	2	5	0	5	0	0	5
	1	2	5	0	5	0	1	
	1	2	5	1	5	0	0	

1	3	4	2			
D	H	T	E	t	h	d
	7	5	0	9	1	7
	9	7	5	9	7	1
9	7	5	9	7	1	9
	7	5	0	9	7	1

1	2	3						
M	HD	TD	D	H	T	E	t	h
	3	4	2	0	0	0	6	0
	3	4	2	0	0	0	6	1
3	4	2	0	0	0	6	1	

3	1	2				
D	H	T	E	t	h	d
1	0	5	0	0	1	2
	5	0	1	1	2	
	5	0	1	1	2	5

1	2	3						
HM	TM	M	HD	TD	D	H	T	E
1	0	0	1	1	1	0	0	1
1	0	0	1	1	1	1	0	1
1	0	0	1	1	1	0	1	1

Antwoord C

999	1.000	1.001
-----	-------	-------

Antwoord C

2.579	2.580	2.581
-------	-------	-------

Antwoord D

25.999	26.000	26.001
--------	--------	--------

Antwoord D maar $203,6 = \mathbf{204,6}$

9.999	10.000	10.001
-------	--------	--------

Antwoord D

31.200	31.201	31.202
--------	--------	--------

5.486	5.487	5.488
-------	-------	-------

6.100	6.101	6.102
-------	-------	-------

9.253	9.254	9.255
-------	-------	-------

42.901

1,09

0,09

84,9	84,95	85	85,05	85,1
------	-------	----	-------	------

20,10	20,20	20,30	20,40	20,50
-------	-------	-------	-------	-------

4,98	5,00	5,02	5,04	5,06
------	------	------	------	------

20,10	20,20	20,30	20,40	20,50
-------	-------	-------	-------	-------

99,6	99,7	99,8	99,9	100
------	------	------	------	-----

100,08	100,09	100,1	100,11	100,12
--------	--------	-------	--------	--------

69,85	69,90	69,95	70	70,05
-------	-------	-------	----	-------

110,20	120,20	130,20	140,20	150,20
--------	--------	--------	--------	--------

600	725	850	1.000	1.125
-----	-----	-----	-------	-------

0,04	0,06	0,08	1	1,02
------	------	------	---	------

9,89	9,90	9,91	9,92	9,93
------	------	------	------	------

803	903	1.003	1.103	1.203
-----	-----	-------	-------	-------

60.000	70.000	80.000	90.000	100.000
--------	--------	--------	--------	----------------

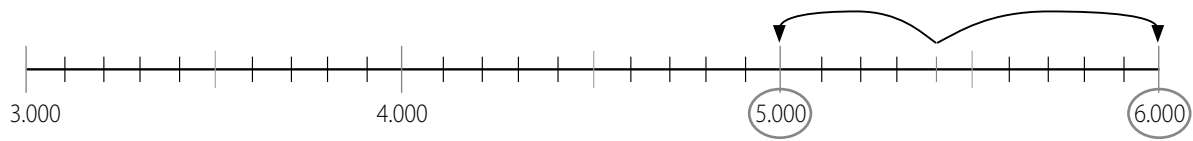
0	50.000	100.000	150.000	200.000
---	--------	---------	---------	---------

450	625	800	975	1.150
-----	-----	-----	-----	-------

9.800.000	9.850.000	9.900.000	9.950.000	10.000.000
-----------	-----------	-----------	-----------	------------

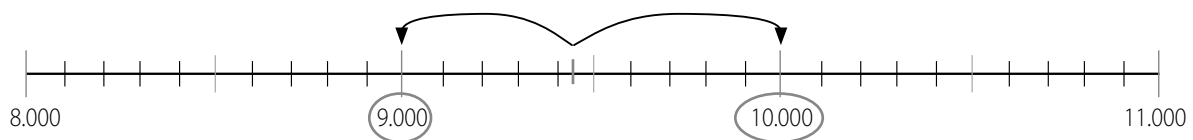
$$5.400 - 400 = 5.000$$

$$5.400 + 600 = 6.000$$



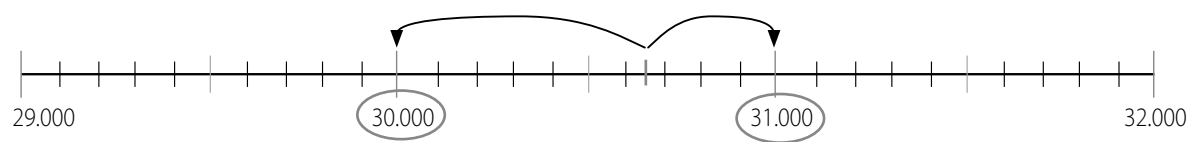
$$9.440 - 440 = 9.000$$

$$9.440 + 560 = 10.000$$



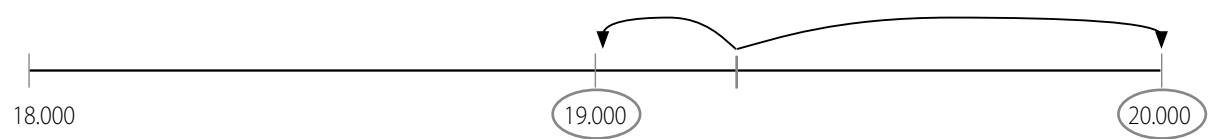
$$30.651 - 651 = 30.000$$

$$30.651 + 349 = 31.000$$



$$19.202 - 202 = 19.000$$

$$19.202 + 798 = 20.000$$



$$81.325 - 325 = 81.000$$

$$81.325 + 675 = 82.000$$

